

Show all work.

Name \_\_\_\_\_

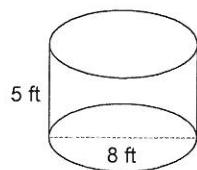
## Homework 89

© 2012 Kuta Software LLC. All rights reserved.

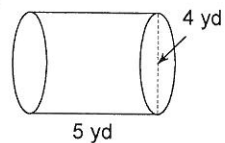
Date \_\_\_\_\_ Period \_\_\_\_\_

**Find the volume of each figure. Round your answers to the nearest thousandth, if necessary.**

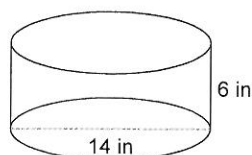
1)



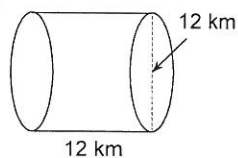
2)



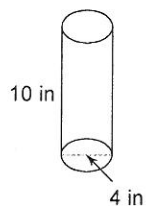
3)



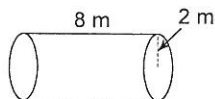
4)



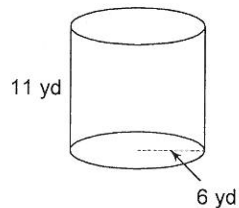
5)



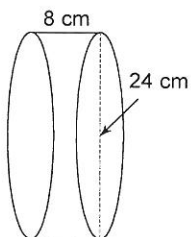
6)



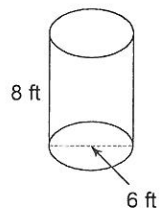
7)



8)



9)



10)

